

Year 2 Homework

Homework to be handed in on Wednesday 15th February

Write at least 3 sentences about the picture below.




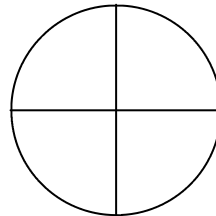

Remember each sentence must: have a CL and FS, have a connective, be neat with finger spaces and make sense.

Maths

Calculate

$$\begin{array}{r} 12 \div 2 \\ 15 \div 5 \\ 16 \div 4 \\ 20 \div 4 \\ 24 \div 4 \\ 18 \div 3 \end{array}$$

Shade 1/4 of these shapes



Estimate

How many **metres** long

A car is

Your bedroom is

Your garden is

Remember
1m = 100cm

What is the missing sign? + or - x or \div ?

7	?	6 =	13
9	?	4 =	5
4	?	5 =	20
6	?	2 =	12
8	?	2 =	4